



**EXERCISE A: Introduction**

Study the label. Read the explanation of each item. Answer each question.

**A = The name of the product.**

1. What is the name of this candy?  
\_\_\_\_\_

**B = The total price of this package.**

2. How much does this package cost?  
\_\_\_\_\_

**C = The manufacturer of the product.**

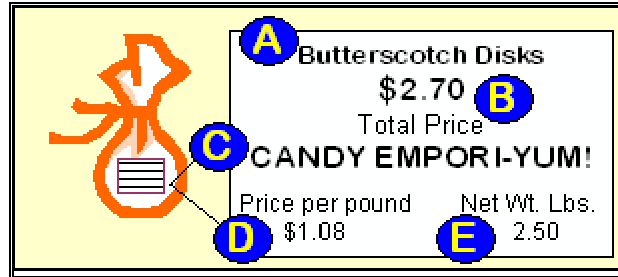
3. Who made this candy?  
\_\_\_\_\_

**D = The price per pound.**

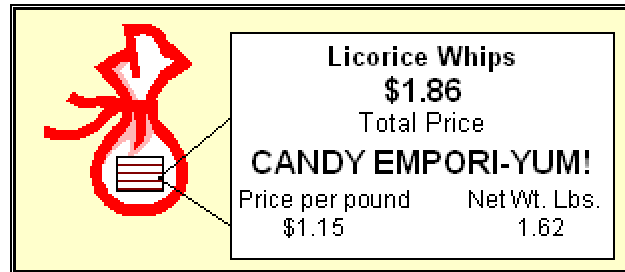
4. How much does one pound of this candy cost?  
\_\_\_\_\_

**E = The net weight of the product.**

5. How much does this package weigh?  
\_\_\_\_\_



**EXERCISE B.** Use the candy labels below to answer the questions below.



|              |  |
|--------------|--|
| (A)(B)(C)(D) | 1. How much does the package of chocolate malt balls cost?<br>a) \$4.64    b) \$1.45    c) \$1.15    d) \$1.86                                     |
| (A)(B)(C)(D) | 2. How much does the package of chocolate malt balls weigh?<br>a) 1 lb.    b) 4.64 lbs.    c) 3.2 lbs.    d) 1.62 lbs.                             |
| (A)(B)(C)(D) | 3. What is the cost per pound of chocolate malt balls?<br>a) \$4.64    b) \$1.45    c) \$1.15    d) \$1.86   |
| (A)(B)(C)(D) | 4. How much does the package of licorice whips cost?<br>a) \$4.64    b) \$1.45    c) \$1.15    d) \$1.86   |
| (A)(B)(C)(D) | 5. What is the total weight of the licorice whips?<br>a) 1 lb.    b) 4.64 lbs.    c) 3.2 lbs.    d) 1.62 lbs.                                      |
| (A)(B)(C)(D) | 6. What is the cost per pound of the licorice whips?<br>a) \$4.64    b) \$1.45    c) \$1.15    d) \$1.86   |
| (A)(B)(C)(D) | 7. Which candy costs less per pound?<br>a) Licorice Whips    b) Chocolate Malt Balls    c) Candy Empori-Yum!    d) They cost the same.             |
| (A)(B)(C)(D) | 8. Which package of candy is the most expensive?<br>a) Licorice Whips    b) Chocolate Malt Balls    c) Candy Empori-Yum!    d) They cost the same. |
| (A)(B)(C)(D) | 9. How much would 2 pounds of Chocolate Malt Balls cost?<br>a) \$4.64    b) \$1.45    c) \$2.90    d) \$9.28                                       |
| (A)(B)(C)(D) | 9. How much would 3 lbs. of Licorice Whips cost?<br>a) \$5.58    b) \$3.45    c) \$1.15    d) \$1.86   |



**EXERCISE A: Introduction**

Study the label. Read the explanation of each item. Answer each question.

**A = The name of the product.**

1. What is the name of this candy?

Butterscotch Disks

**B = The total price of this package.**

2. How much does this package cost?

\$2.70

**C = The manufacturer of the product.**

3. Who made this candy?

Candy Empori-Yum!

**D = The price per pound.**

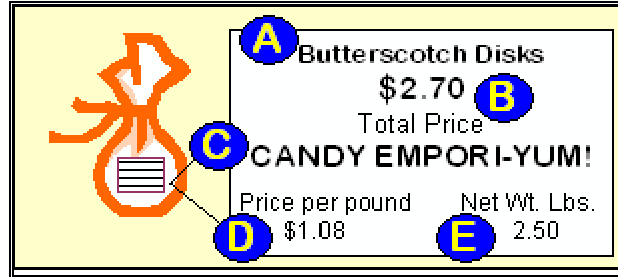
4. How much does one pound of this candy cost?

\$1.08

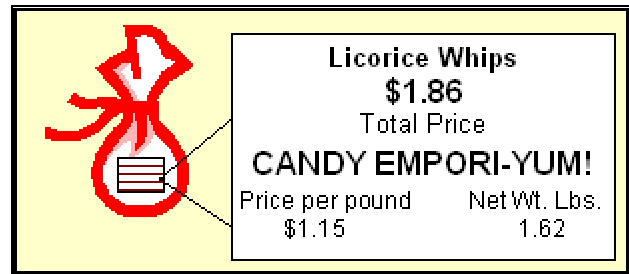
**E = The net weight of the product.**

5. How much does this package weigh?

2.50 lbs.



**EXERCISE B.** Use the candy labels below to answer the questions below.



|            |   |
|------------|---|
| ●(B)(C)(D) | 1. How much does the package of Chocolate Malt Balls cost?<br>a) \$4.64   b) \$1.45   c) \$1.15   d) \$1.86                                     |
| (A)(B)●(D) | 2. How much does the package of Chocolate Malt Balls weigh?<br>a) 1 lb.   b) 4.64 lbs.   c) 3.2 lbs.   d) 1.62 lbs.                             |
| (A)●(C)(D) | 3. What is the cost per pound of Chocolate Malt Balls?<br>a) \$4.64   b) \$1.45   c) \$1.15   d) \$1.86   |
| (A)(B)(C)● | 4. How much does the package of Licorice Whips cost?<br>a) \$4.64   b) \$1.45   c) \$1.15   d) \$1.86   |
| ●(B)(C)(D) | 5. What is the total weight of the Licorice Whips?<br>a) 1.62 lbs.   b) 3.2 lbs.   c) 4.64 lbs.   d) 1 lb.                                      |
| (A)(B)●(D) | 6. What is the cost per pound of the Licorice Whips?<br>a) \$4.64   b) \$1.45   c) \$1.15   d) \$1.86   |
| ●(B)(C)(D) | 7. Which candy costs less per pound?<br>a) Licorice Whips   b) Chocolate Malt Balls   c) Candy Empori-Yum!   d) They cost the same.             |
| (A)(B)●(D) | 8. Which package of candy is the most expensive?<br>a) Candy Empori-Yum!   b) Licorice Whips   c) Chocolate Malt Balls   d) They cost the same. |
| (A)(B)(C)● | 9. How much would 2 pounds of Chocolate Malt Balls cost?<br>a) \$4.64   b) \$1.45   c) \$2.90   d) \$9.28                                       |
| (A)●(C)(D) | 9. How much would 3 lbs. of Licorice Whips cost?<br>a) \$5.58   b) \$3.45   c) \$2.30   d) \$1.86   |